















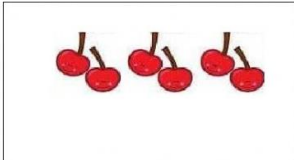



Date: 25/10/2022
GRADE: I




TERM 1 (2022-23)
MATHEMATICS

Max marks: 40
Time: 2 hours

Name :

Q.No.	Questions	Mark
I	Choose the correct answer for the following questions.	10x1=10
1.	How many smileys are there in the picture given below?  a) 6 b) 7 c) 8	
2.	What comes next?  a)  b)  c) 	
3.	Which of the following represents number 11? a)  b)  c) 	
4.	Tick the picture that is different. a)  b)  c) 	

<p>5.</p> <p>a) 14 b) 40 c) 4</p> <p>6.</p> <p>a) 13 b) 31 c) 10</p> <p>7.</p> <p>a) 56 b) 45 c) 63</p> <p>8.</p>	<p>The number for the number name 'forty' is:</p> <p>1ten and 3ones make the number:</p> <p>Choose the bigger number from among the following.</p> <p>Tick the box that has less number of objects.</p> <div style="display: flex; justify-content: space-around; align-items: center;"> <div style="text-align: center;">  <input type="checkbox"/> </div> <div style="text-align: center;">  <input type="checkbox"/> </div> </div> <p>9.</p> <p>a) Two b) twelve c) twenty</p> <p>10.</p> <div style="display: flex; justify-content: space-around; align-items: center;"> <div style="text-align: center;"> <p>a)</p>  </div> <div style="text-align: center;"> <p>b)</p>  </div> <div style="text-align: center;"> <p>c)</p>  </div> </div>	
<p>II</p>	<p>Fill in the blanks.</p>	<p>3x1=3</p>
<p>11.</p> <p>12.</p> <p>13.</p>	<p>What comes after? 49 _____</p> <p>The smaller number among 6 and 8 is _____.</p> <p>34, 35, 36, 37, 38, 39, _____.</p>	
<p>III</p>	<p>State whether the following sentences are true or false.</p>	<p>2x1=2</p>
<p>14.</p> <p>15.</p>	<p>The number that comes before 9 is _____.</p> <p>The number that comes between 25 and 27 is _____</p>	

IV	Match the following.	4x1=4
<p>16.</p> <p>17.</p> <p>18.</p> <p>19.</p>	 <div data-bbox="858 215 1075 770" style="border: 1px solid black; padding: 10px; margin-left: auto; margin-right: auto;"> <p>a) 20</p> <p>b) 43</p> <p>c) 32</p> <p>d) 59</p> </div>	
V	Answer the following questions.	
<p>20.</p> <p>21.</p> <p>22.</p>	<p>Write the number name for the following numbers.</p> <p>a) 16 - _____</p> <p>b) 50 - _____</p> <p>c) 8 - _____</p> <p>d) 0 - _____</p> <p>Complete the pattern.</p>  <p>Colour the circle red, the triangle green, the square blue and the rectangle yellow.</p> 	<p>4</p> <p>2</p> <p>4</p>

23. Count and write the numbers and its number names.

4

a)




b)



24. Fill in the missing number.


3



26. Colour the correct number of objects shown in each group

2

17



14



27. Write the biggest number on the biggest pumpkin and the smallest number on the smallest pumpkin.

2

19 10 6



THE END

